

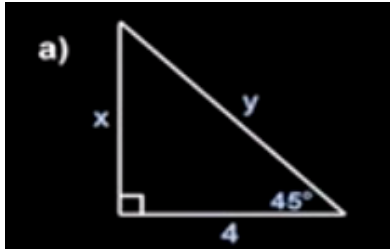
UNIT 6
ASSIGNMENT #8

Working with Special Right Triangles Part 2

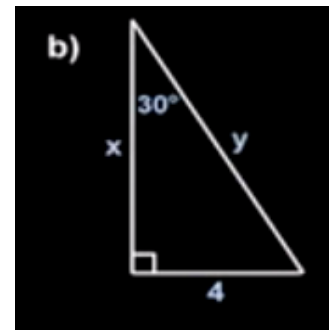
OBJECTIVE: S.W.B.A.T. determine a plan to solve special right triangle problems.

DIRECTIONS: Watch the video on the class wiki, then solve the following problems.

Using the diagrams shown, find the values of x and y .



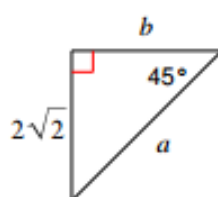
NOTES



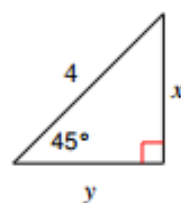
NOTES

Find the missing side lengths. Leave your answers as radicals in simplest form.

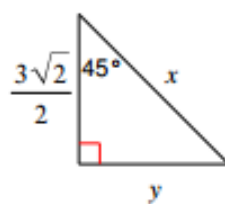
1)



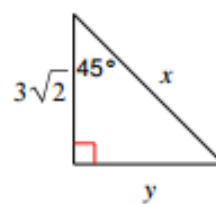
2)



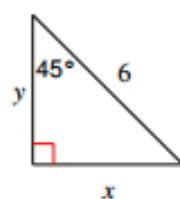
3)



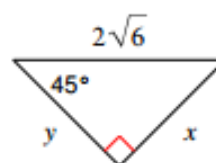
4)



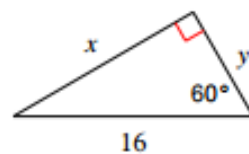
5)



6)



7)



8)

